




Measure of Success

Activity Sheet

Name: _____ Class: _____

Measure each object in centimeters.
Tell the difference in length.

1



_____ centimeters




_____ centimeters

The pencil is _____ centimeter(s) longer than the crayon.

2



_____ centimeters



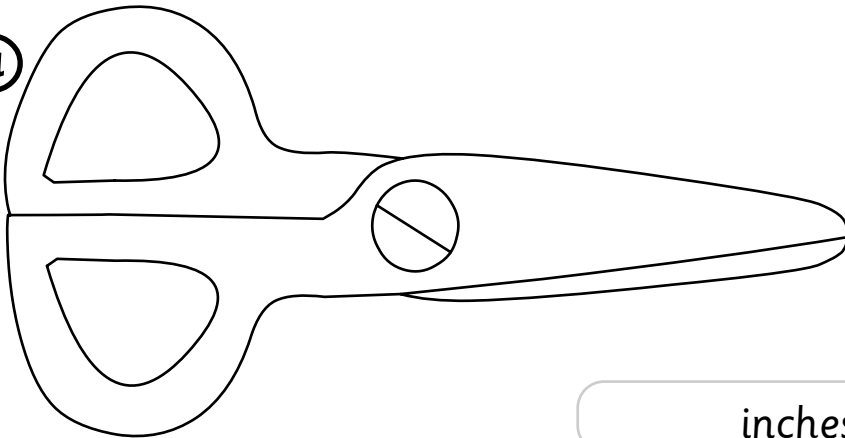
_____ centimeters

The pen is _____ centimeter(s) longer than the eraser.

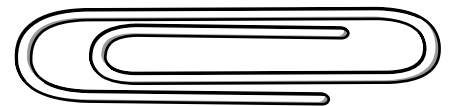


Measure each object in inches.
Tell the difference in length.

a



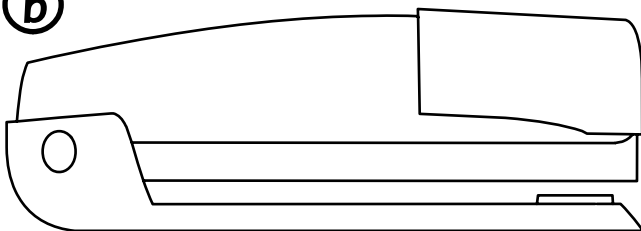
_____ inches



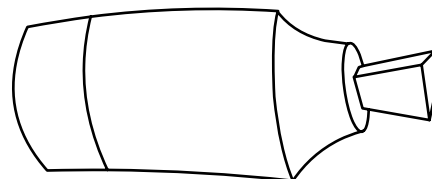
_____ inches

The scissors are _____ inch(es) longer than the paperclip.

b



_____ inches



_____ inches

The stapler is _____ inch(es) longer than the marker.